

# Quarters




One **quarter** is 25 cents.

The word “quarter” means one-fourth. A quarter coin is one-fourth part of a **dollar**.

One dollar is 100 cents, and is written \$1.



4 quarters  
1 dollar



=  
100¢  
1 dollar = \$1



Two quarters = 50¢.



Three quarters = 75¢



25¢



35, 45, 55

(count dimes by tens)



56, 57¢

Count the quarters first since they have the biggest cent-value.

1. Quarters and dimes. Write the total amount in cents.

a.



b.



c.



d.



e.



f.



g.



h.















i.



2. Quarters and nickels. Write the total amount in cents.

<p>a.</p> 	<p>b.</p> 	<p>c.</p> 
---	---	---

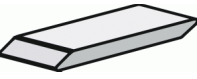

















3. How much money? Write down the amount in cents.

<p>a.</p> 	<p>b.</p> 
<p>c.</p> 	<p>d.</p> 
<p>e.</p> 	<p>f.</p> 
<p>g.</p> 	<p>h.</p> 
<p>i.</p> 	<p>j.</p> 
<p>k.</p> 	<p>l.</p> 

4. How much is the total if you have:

<p>a. two dimes and a quarter</p>	<p>b. two dimes, four nickels</p>
<p>c. a dime, a nickel, six pennies</p>	<p>d. two quarters, three dimes, seven pennies</p>

5. Cross out the coins you need to buy the item. Write how many cents you have left.

<p>a.  39¢</p>  <p>Left _____¢</p>	<p>b.  88¢</p>  <p>Left _____¢</p>	<p>c.  54¢</p>  <p>Left _____¢</p>
<p>d.  61¢</p>  <p>Left _____¢</p>	<p>e.  97¢</p>  <p>Left _____¢</p>	<p>f.  81¢</p>  <p>Left _____¢</p>
<p>g.  73¢</p>  <p>Left _____¢</p>	<p>h.  45¢</p>  <p>Left _____¢</p>	<p>i.  26¢</p>  <p>Left _____¢</p>