









# Completing the Next Hundred

1. You need 10 ten-pillars to make a new hundred. Draw in the missing ten-pillars, and complete the next whole hundred.

 + _____ =  <b>a.</b> 160 + _____ = 200	 + _____ =  <b>b.</b> 250 + _____ = 300
 + _____ =  <b>c.</b> 180 + _____ = 200	 + _____ =  <b>d.</b> 220 + _____ = 300

2. Complete the next hundred. COMPARE the problems in each box.

<b>a.</b>	<b>b.</b>	<b>c.</b>
80 + _____ = 100	30 + _____ = 100	40 + _____ = _____
280 + _____ = 300	330 + _____ = _____	940 + _____ = 1000
680 + _____ = _____	530 + _____ = _____	740 + _____ = _____

3. Complete the next hundred. Think of a helping problem where you complete just 100.

<b>a.</b>	<b>b.</b>	<b>c.</b>
540 + _____ = 600 ( 40 + _____ = 100 )	250 + _____ = 300 ( 50 + _____ = 100 )	630 + _____ = 700 ( 30 + _____ = 100 )
<b>d.</b> 120 + _____ = _____	<b>e.</b> 440 + _____ = _____	<b>f.</b> 970 + _____ = _____

4. Solve each subtraction by thinking of the difference or of the “how many more” addition.

<b>a.</b>	<b>b.</b>	<b>c.</b>
500 - 440 = _____ ( 440 + _____ = 500 )	800 - 710 = _____ ( difference of 800 and 710 )	1000 - 960 = _____ ( 960 + _____ = 1000 )